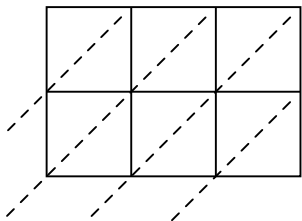


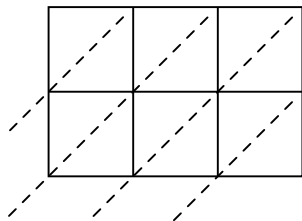


Use lattice multiplication to solve each problem.

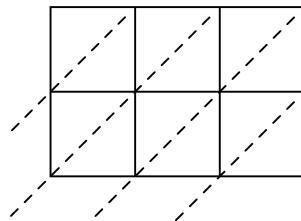
1)  $189 \times 31 =$



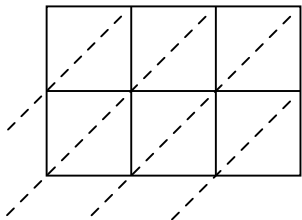
2)  $633 \times 58 =$



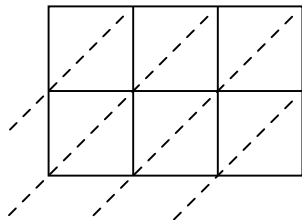
3)  $856 \times 16 =$



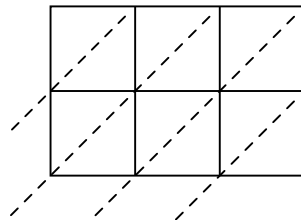
4)  $254 \times 35 =$



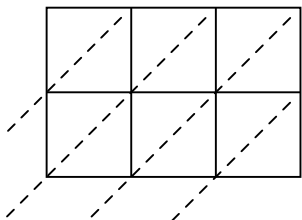
5)  $186 \times 28 =$



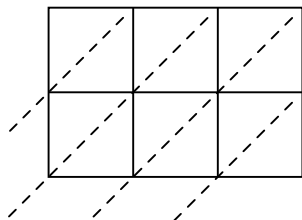
6)  $390 \times 84 =$



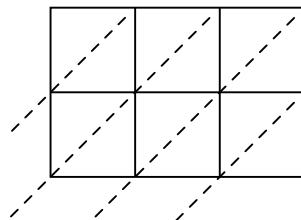
7)  $325 \times 37 =$



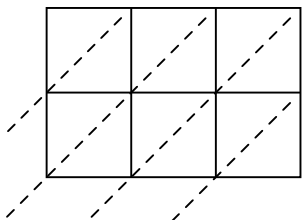
8)  $493 \times 91 =$



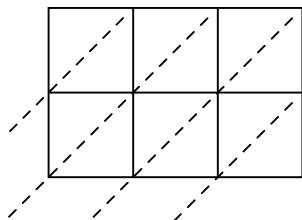
9)  $348 \times 20 =$



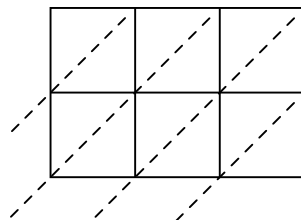
10)  $894 \times 10 =$



11)  $961 \times 10 =$



12)  $317 \times 15 =$



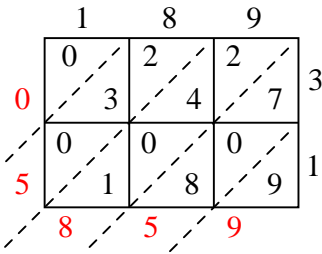
**Answers**

- 1. \_\_\_\_\_
- 2. \_\_\_\_\_
- 3. \_\_\_\_\_
- 4. \_\_\_\_\_
- 5. \_\_\_\_\_
- 6. \_\_\_\_\_
- 7. \_\_\_\_\_
- 8. \_\_\_\_\_
- 9. \_\_\_\_\_
- 10. \_\_\_\_\_
- 11. \_\_\_\_\_
- 12. \_\_\_\_\_

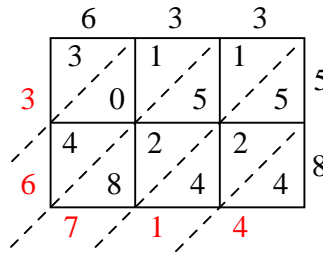


Use lattice multiplication to solve each problem.

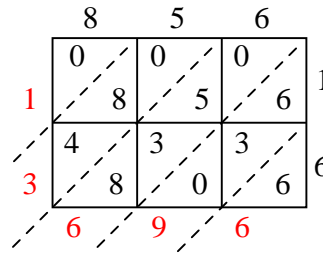
1)  $189 \times 31 =$



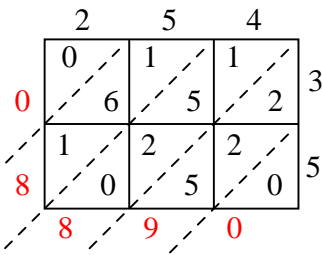
2)  $633 \times 58 =$



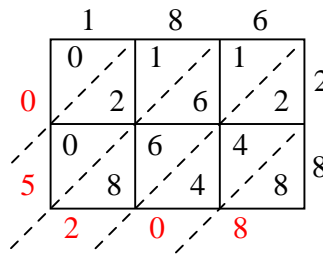
3)  $856 \times 16 =$



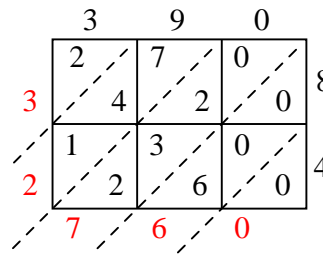
4)  $254 \times 35 =$



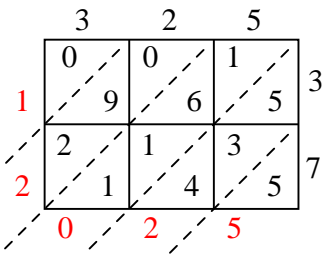
5)  $186 \times 28 =$



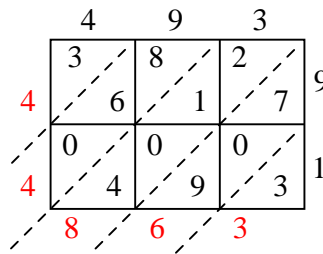
6)  $390 \times 84 =$



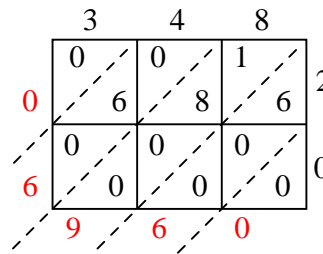
7)  $325 \times 37 =$



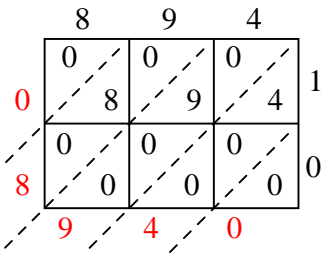
8)  $493 \times 91 =$



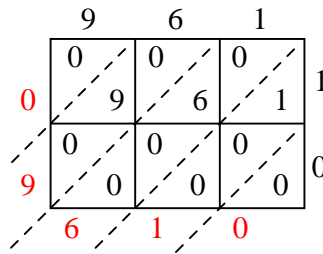
9)  $348 \times 20 =$



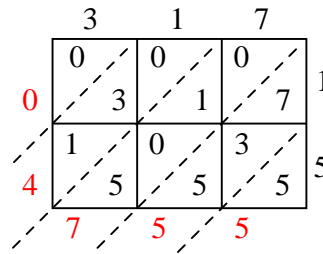
10)  $894 \times 10 =$



11)  $961 \times 10 =$



12)  $317 \times 15 =$



Answers

1. **5,859**

2. **36,714**

3. **13,696**

4. **8,890**

5. **5,208**

6. **32,760**

7. **12,025**

8. **44,863**

9. **6,960**

10. **8,940**

11. **9,610**

12. **4,755**